

Fraction strips – To use along with Wednesday’s White Rose video

$$\frac{2}{9} + \frac{1}{3}$$

Use fraction strips to help you calculate

$$\frac{1}{4} + \frac{1}{12}$$


Have a think



Have a think

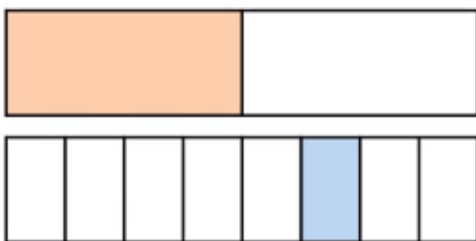


Use the fraction strips to help you work out $\frac{1}{6} + \frac{1}{2}$

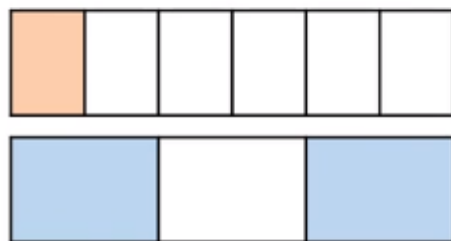


Use the fraction strips to help you add together these pairs of fractions.

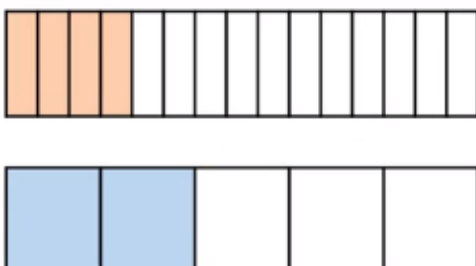
$$\frac{1}{2} + \frac{1}{8} =$$



$$\frac{1}{6} + \frac{2}{3} =$$



$$\frac{4}{15} + \frac{2}{5} =$$



$$\frac{5}{12} + \frac{1}{2} =$$

