

One more one less



1 Use counters or cubes to make each number.

a) one more than 21

b) one more than 34

c) one less than 41

d) one less than 30

2 Use different colours to show each number on the grid.



a) one less than 17

c) one more than 39

b) one more than 26

d) one less than 50

1	2	3	4	5	6	7	8	9	10
11	12	13	14	15	16	17	18	19	20
21	22	23	24	25	26	27	28	29	30
31	32	33	34	35	36	37	38	39	40
41	42	43	44	45	46	47	48	49	50

3 Fill in the missing numbers.

One less	Number	One more
	31	
31		
		31
47		
		47

4



My number has 4 tens. One more than my number would make the tens digit change.

Whitney



My number is one more than forty-five.


Dexter

Who has the greater number? _____




Compare objects within 50

I a) Draw counters to show the apples.



b) Draw counters to show the children.



c) Complete the sentences.


There are apples.

There are children.

There are fewer _____ than



d)



All the children can have one apple.

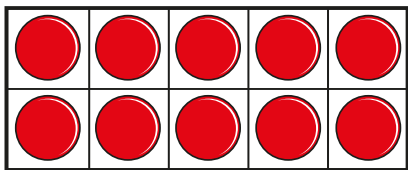
Is Teddy correct?



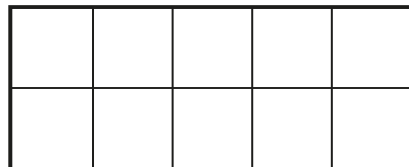
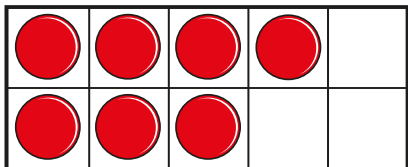
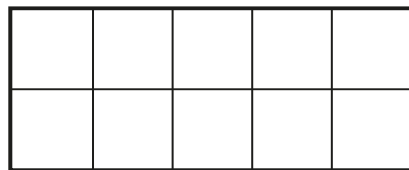
2

Draw counters to make the statements true.

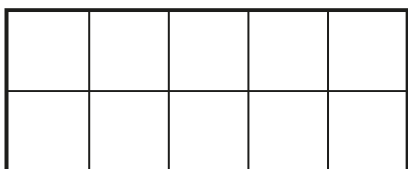
a)



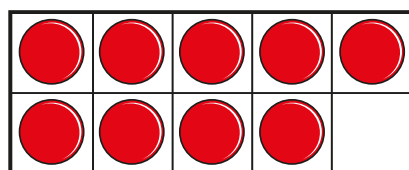
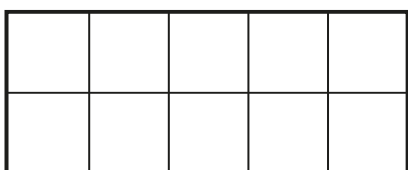
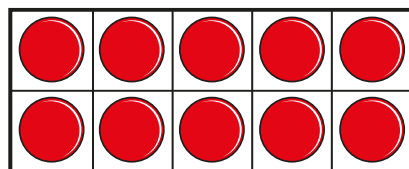
>



b)



>



c)

●	●	●	●	●
●	●	●	●	●

●	●	●	●	●
●	●	●	●	●

 \lt

●		●		
●			●	

d)

●	●	●		
	●	●	●	

 $=$

Is there more than one answer for each?



Compare numbers within 50



1 Tick the number sentences that are true.

Use cubes or counters to help you.

- a) 12 is more than 13
- b) 33 is less than 41
- c) 2 tens and 8 ones is equal to twenty-eight
- d) $40 + 8$ is more than $30 + 9$
- e) Thirty-one is less than 3 tens

2 Write the missing phrase.

greater than

less than

equal to

a) 22 is _____ 29

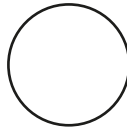
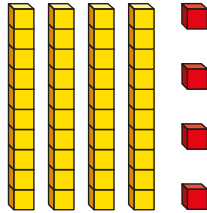

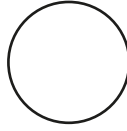
b) 41 is _____ 4 tens

c) Forty-six is _____ $40 + 3$

d) $40 + 8$ is _____ one more than 47

3 Write $<$, $>$ or $=$ in each circle.

24



3 tens and 14 ones

4 Complete the table.

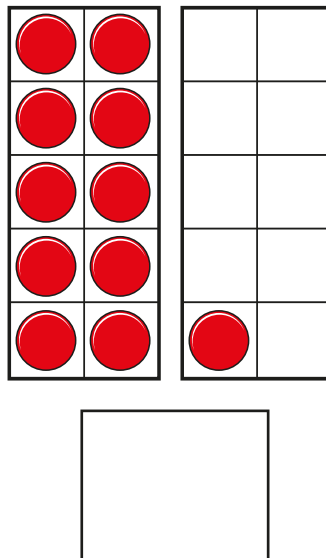
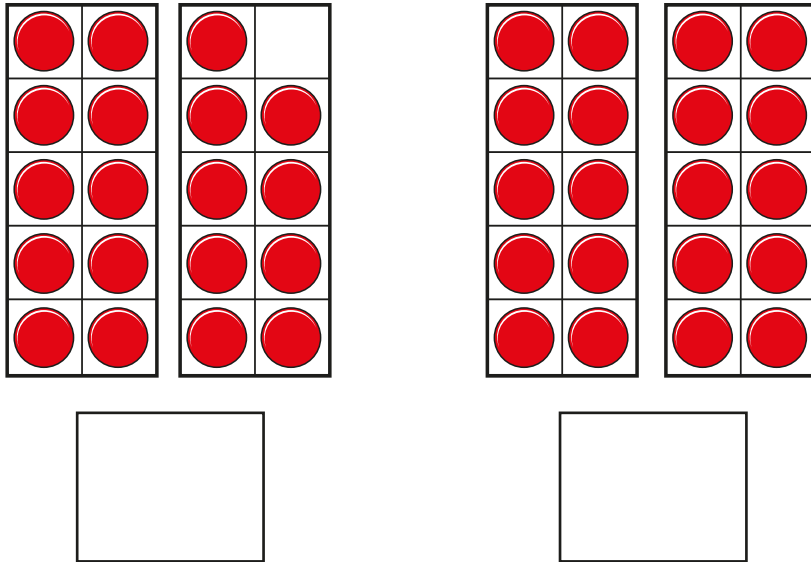
Write or draw your answers.



	is more than	
	=	
	>	
	is less than	
	is equal to	

Order numbers within 50

I a) What are the numbers?



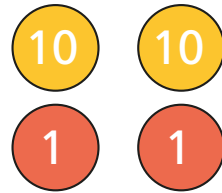

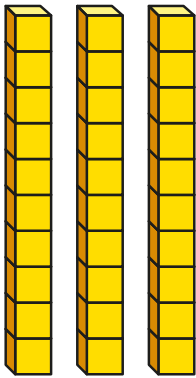
Write the numbers in order.

Start with the smallest number.

smallest

greatest

b) What are the numbers?



Write the numbers in order.

Start with the smallest number.

smallest

greatest

2

Write the numbers in order.

Start with the smallest number.

a)

36

31

32

smallest

greatest



b)

39

49

29

smallest

greatest

3

Write the numbers in order.

Start with the greatest number.

17

41

28

greatest

smallest

4

Complete the number sentence.

2 tens and 3 ones <

< forty-one

Is there more than one answer?

