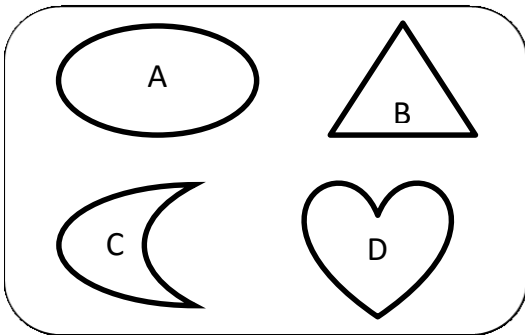


ODD ONE OUT

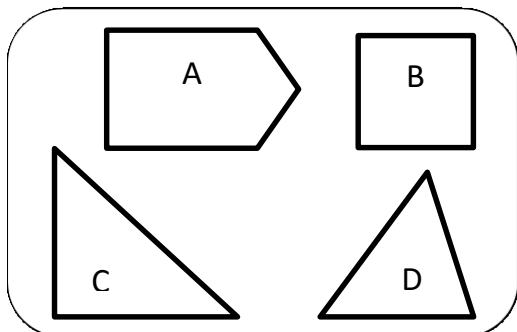
Circle the odd one out shape in each box and explain why the shape does not belong to the set.

WORD BANK: straight, curved, sides, vertices, types of shape (circle, semi-circle, oval, heart, triangle, quadrilateral, square, rectangle, kite, rhombus, trapezoid, pentagon, hexagon, octagon,...)



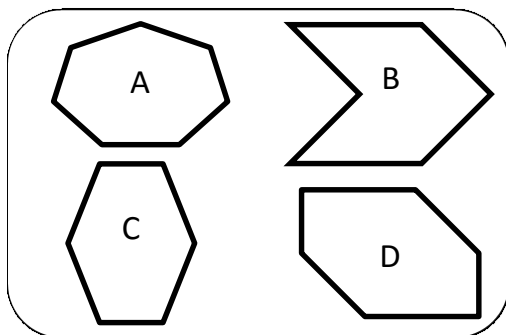
1) Shape doesn't belong to the set
because:

.....
.....



2) Shape doesn't belong to the set
because:

.....
.....



3) Shape doesn't belong to the set
because:

.....
.....

Challenge: Make your own odd one out boxes. Ask a family member to find the odd one out and explain.