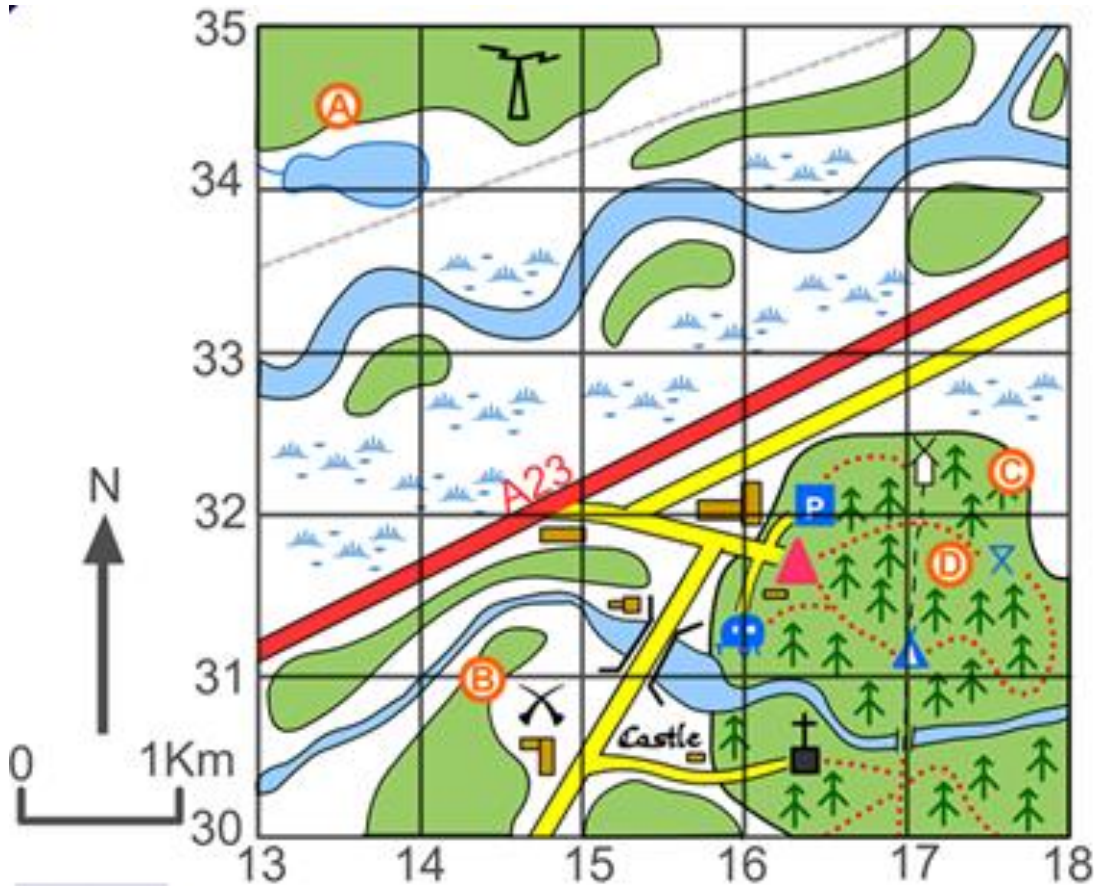


## 4 Figure Grid Reference



**Q1 Give the 4 figure grid reference for**

Coal Mine : : \_\_\_\_\_

Parking: \_\_\_\_\_

Castle : \_\_\_\_\_

Church : \_\_\_\_\_

Caravan site: \_\_\_\_\_

**Q2 What is at the following grid reference:**

1630 = \_\_\_\_\_


1431 = \_\_\_\_\_


1731 = \_\_\_\_\_

1732 = \_\_\_\_\_


### Key

 = Church

 = Parking

 = Coal Mine

 = Caravan site

 = Windmill