

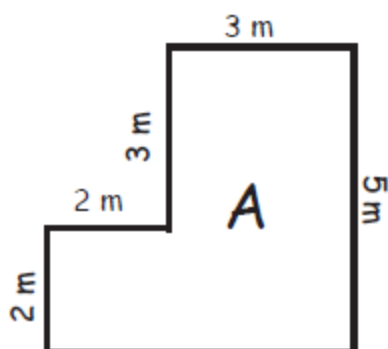
Name _____

Date _____



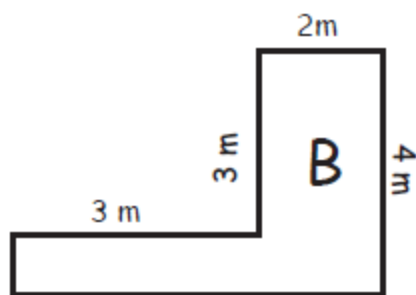
MA

Can you help me find which room has the longest perimeter and the largest area?
Write your answer below.



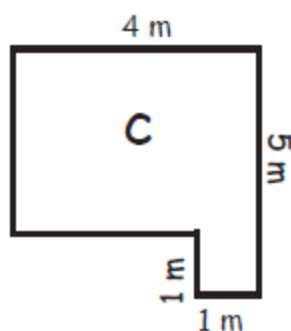
Perimeter _____

Area _____



Perimeter _____

Area _____



Perimeter _____

Area _____

Room _____ has the longest perimeter.

Room _____ has the largest area.