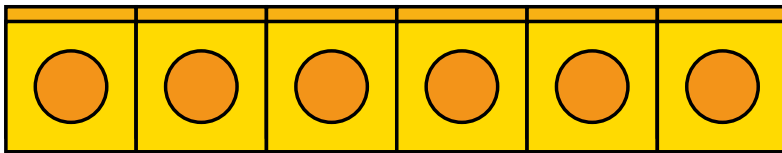


# Measure length (1)

I How long is each object?

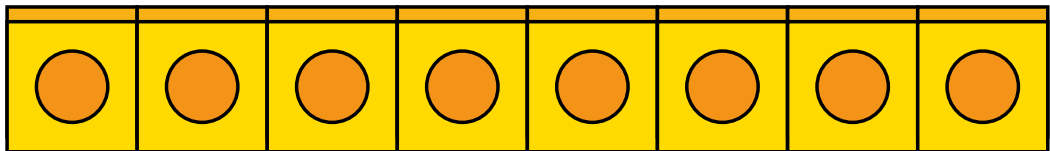
a)



The pencil is

cubes long.

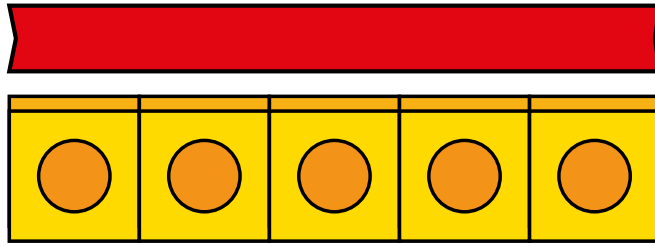
b)



The chew bar is

cubes long.

c)




The ribbon is  cubes long.

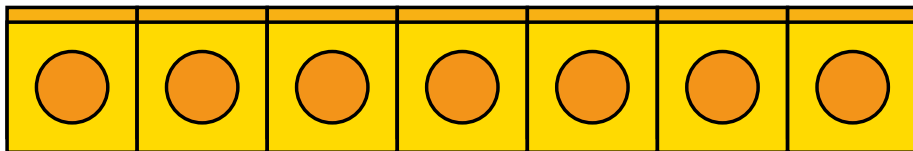
d) Use cubes to measure some objects in your classroom.



2



The pen is  
7 cubes long.





Do you agree with Rosie? \_\_\_\_\_

Talk about it with a partner.



3 Tommy is measuring objects.



The car and  
the crayon are the  
same length.

Do you agree with Tommy? \_\_\_\_\_

4 Measure objects in your classroom with these items.

- cubes
- hands
- sticks

Which object is the longest?

Which is the shortest?

How do you know?