

Find a third

- 1 3 children are sharing a bar of chocolate.

The chocolate is split into 6 equal parts.



- a) Draw lines to share the chocolate equally.

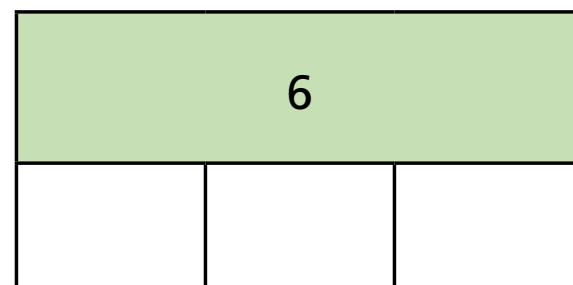
- b) Complete the sentences.

The whole chocolate bar is split into equal parts.

Each child gets parts each.

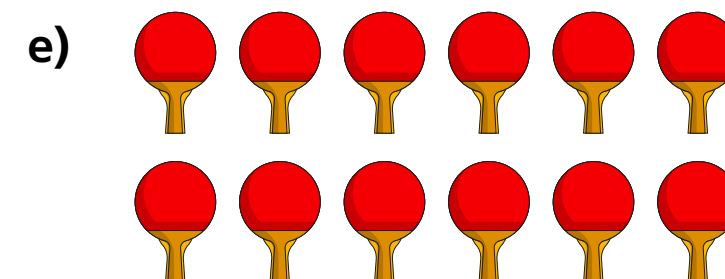
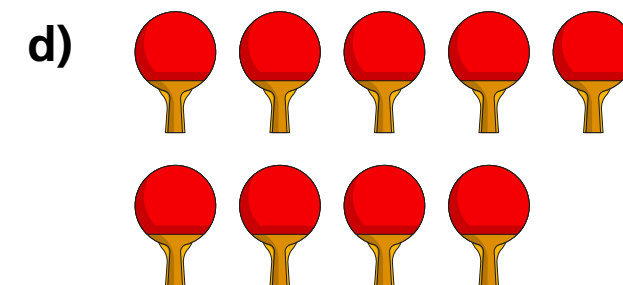
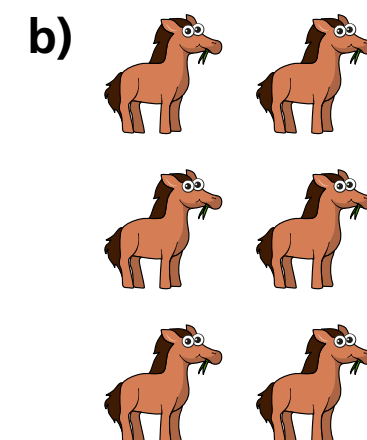

$$\frac{1}{3} \text{ of } 6 = \text{ }$$

- c) Complete the bar model and number sentence.




$$\frac{1}{3} \text{ of } 6 = \text{ }$$

- 2 Circle $\frac{1}{3}$ of each group of items.




- 3 Circle $\frac{1}{3}$ of each group of items.
Complete the number sentences.



$$\frac{1}{3} \text{ of } 15 = \boxed{}$$




$$\boxed{} \text{ of } \boxed{} = \boxed{}$$



$$\boxed{} \text{ of } \boxed{} = \boxed{}$$


- 4 One third of a number is 4
What is the number?



The number is



5



Teddy

I have $\frac{1}{3}$ of £9



Mo

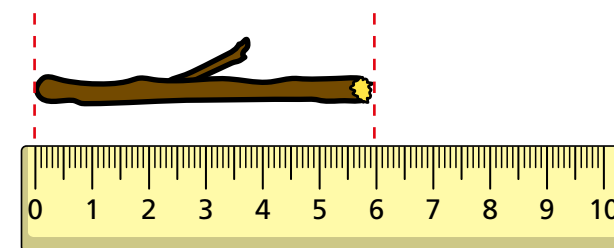
I have $\frac{1}{2}$ of £8

Who has more money? _____

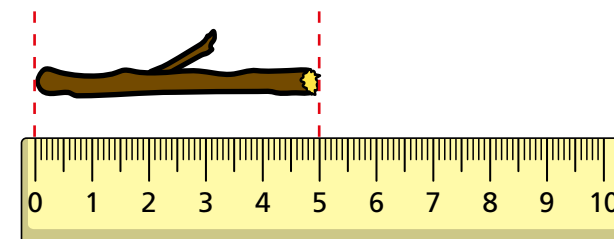
How do you know?

- 6 Whitney snaps two sticks into thirds.
Here is $\frac{1}{3}$ of each stick.

Stick A



Stick B



- a) How long was stick A before Whitney snapped it?

cm

- b) How long was stick B before Whitney snapped it?

cm

