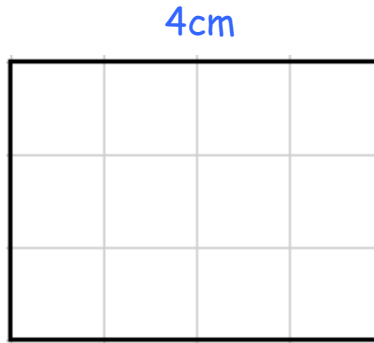


Area of Rectangles

The area of this rectangle is 12cm^2 .

The area of a rectangle is:
Area = length \times width



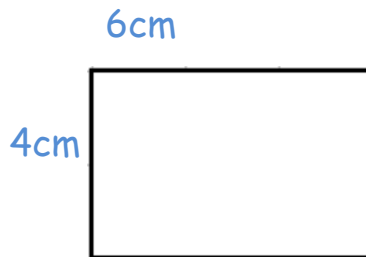
$$\begin{aligned}\text{Area} &= \text{length} \times \text{width} \\ &= 3 \times 4 \\ &= 12\text{cm}^2\end{aligned}$$

Find the perimeter and area of these rectangles in cm



Perimeter = cm

Area = cm^2



Perimeter = cm

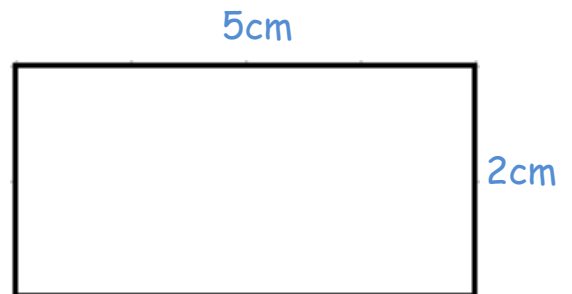
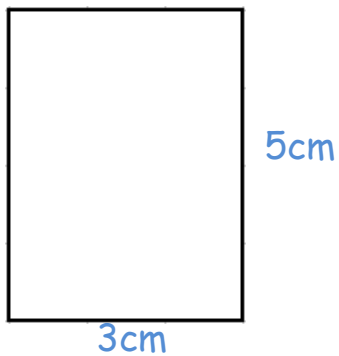
Area = cm^2



Perimeter = cm

Area = cm^2

Colour the rectangle with the smallest area



Colour the rectangles with an area greater than 19cm^2

